

KERALA PUBLIC SCHOOLS
ACADEMIC YEAR 2020-21
HOME ASSIGNMENT



CLASS : I
DATE: 15.01.2021 to 30.01.2021

SUBJECT	ASSIGNMENT										
MATHS	<p>REVISION WORK TO BE DONE IN MATHS NOTEBOOK</p> <p>I. Add the given numbers:</p> <table style="width: 100%; border: none;"> <tr> <td style="text-align: center;">i.26 +32 <input style="width: 60px; height: 20px;" type="text"/></td> <td style="text-align: center;">ii.25 +61 <input style="width: 60px; height: 20px;" type="text"/></td> <td style="text-align: center;">iii.43 13 +22 <input style="width: 60px; height: 20px;" type="text"/></td> <td style="text-align: center;">iv.45 +12 <input style="width: 60px; height: 20px;" type="text"/></td> <td style="text-align: center;">v.24 41 +32 <input style="width: 60px; height: 20px;" type="text"/></td> </tr> </table> <p>II. Subtract the given numbers:</p> <table style="width: 100%; border: none;"> <tr> <td style="text-align: center;">i.35 -7 <input style="width: 60px; height: 20px;" type="text"/></td> <td style="text-align: center;">ii.50 -4 <input style="width: 60px; height: 20px;" type="text"/></td> <td style="text-align: center;">iii.34 -13 <input style="width: 60px; height: 20px;" type="text"/></td> <td style="text-align: center;">iv.98 -62 <input style="width: 60px; height: 20px;" type="text"/></td> <td style="text-align: center;">v.75 -44 <input style="width: 60px; height: 20px;" type="text"/></td> </tr> </table> <p>III. Fill in the missing numbers:</p> <p>i. $80 + 10 =$ <input style="width: 50px; height: 20px;" type="text"/></p> <p>ii. $2\text{tens} + 5\text{tens} =$ <input style="width: 50px; height: 20px;" type="text"/></p> <p>iii. $60 - 20 =$ <input style="width: 50px; height: 20px;" type="text"/></p> <p>iv. $90 - 30 =$ <input style="width: 50px; height: 20px;" type="text"/></p> <p>v. $5\text{ones} - 3\text{ones} =$ <input style="width: 50px; height: 20px;" type="text"/></p> <p>vi. $40 + 5 + 5 =$ <input style="width: 50px; height: 20px;" type="text"/></p> <p>IV. Tick the correct statements and cross the wrong ones:</p> <p>i. Finger width is the biggest size for a person _____</p> <p>ii. The length of a paper clip is more than a pencil box _____</p> <p>iii. Watermelon is light in weight. _____</p> <p>iv. Which box is heavier? _____</p> <p>v. <input style="width: 50px; height: 20px;" type="text"/></p>	i.26 +32 <input style="width: 60px; height: 20px;" type="text"/>	ii.25 +61 <input style="width: 60px; height: 20px;" type="text"/>	iii.43 13 +22 <input style="width: 60px; height: 20px;" type="text"/>	iv.45 +12 <input style="width: 60px; height: 20px;" type="text"/>	v.24 41 +32 <input style="width: 60px; height: 20px;" type="text"/>	i.35 -7 <input style="width: 60px; height: 20px;" type="text"/>	ii.50 -4 <input style="width: 60px; height: 20px;" type="text"/>	iii.34 -13 <input style="width: 60px; height: 20px;" type="text"/>	iv.98 -62 <input style="width: 60px; height: 20px;" type="text"/>	v.75 -44 <input style="width: 60px; height: 20px;" type="text"/>
i.26 +32 <input style="width: 60px; height: 20px;" type="text"/>	ii.25 +61 <input style="width: 60px; height: 20px;" type="text"/>	iii.43 13 +22 <input style="width: 60px; height: 20px;" type="text"/>	iv.45 +12 <input style="width: 60px; height: 20px;" type="text"/>	v.24 41 +32 <input style="width: 60px; height: 20px;" type="text"/>							
i.35 -7 <input style="width: 60px; height: 20px;" type="text"/>	ii.50 -4 <input style="width: 60px; height: 20px;" type="text"/>	iii.34 -13 <input style="width: 60px; height: 20px;" type="text"/>	iv.98 -62 <input style="width: 60px; height: 20px;" type="text"/>	v.75 -44 <input style="width: 60px; height: 20px;" type="text"/>							

Tick the longer line

vi.



Which is the longest pole? _____

V. Calculate the total amount for the following:

I. 1 doll *Rs.12*

1 toffee *Rs.10*

3 pencils + *Rs.15*



ii. 2 cold drinks *Rs.20*

1 football *Rs.20*

2 erasers + *Rs.10*



VI. Answer the following questions:

i. Which coin is bigger in size?

a. Rs.10 b. Rs.5

ii. Which of the following currency note is not in use?

a. Rs.100 b. Rs.200 c. Rs.1000

iii. Which of the following is not available in the form of coins?

a. Rs.5 b. Rs.10 c. Rs.20

iv. _____ is the third day of the week

v. _____ is the seventh day of the week


vii. We celebrate Independence Day on _____


viii. The long hand in the clock is the _____ hand.


ix. The time between morning and evening is called _____


x. The short hand in the clock is called _____

VII. Show the time asked in the clock

i.  7 o'clock

ii.  6 o'clock

iii.  2 o'clock

iv.  3 o'clock

VIII. Multiply the following:

i. $7 \times 4 = \underline{\hspace{2cm}}$

ii. $6 \times 5 = \underline{\hspace{2cm}}$

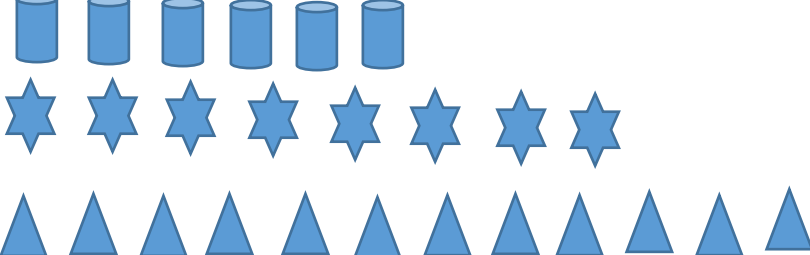
iii. $7 \times 2 = \underline{\hspace{2cm}}$

iv. $6 \times 3 = \underline{\hspace{2cm}}$

v. $5 \times 5 = \underline{\hspace{2cm}}$

vi. $2 \times 3 = \underline{\hspace{2cm}}$

IX. Collect the data accordingly:

i. 



Write the number of objects in the given box accordingly.

SCIENCE

CH-Water

Read the chapter thoroughly:

I. Learn the words mentioned below:

- | | | |
|---------|-----------|-------------|
| 1.water | 6.ground | 11.pots |
| 2.rain | 7.digging | 12.buckets |
| 3.river | 8.wells | 13.tanks |
| 4.ponds | 9.deep | 14.dam |
| 5.lakes | 10.hole | 15.drinking |

Let's Remember(Pg No:105)

II. Fill in the blanks:

- 1.All living things need water to live.
- 2.We get water from rain.
- 3.We should not waste water.
- 4.We should throw wastes into a well.
- 5.Water can be stored in many ways.

III. Write T for true and F for false statement:

- 1.We cannot get water from under the ground.**F**
- 2.We should throw waste into wells,lakes,rivers,or ponds.**F**
- 3.Water can be stored in buckets,tanks,and cloth bags.**F**
- 4.Water is needed for putting out fires.**T**
- 5.Drinking dirty water can make us ill.**T**

IV. Choose the correct option:

- i.From which of these do we get water?
d.All of these
- ii.Which of these can be used to store water?
d.All of these
- iii.Which of these is not true about a dam?
b.It stores rain water.
- iv.Which of these do we need water for?
d.All of these.
- v.Which of these need water to live?
b.It stores rain water.






V.Give one word for each of the following.

- 1.A deep hole dug to get water from under the ground. **Well**
- 2.A wall built across a river to hold back water. **Dam**
- 3.This fills up water in rivers,ponds,and lakes. **Rain**

VI.Answer the following questions.

1. What is a well?

A deep hole dug to get water from under the ground is called a well.

	<p>2. What is a dam? How is it useful? A wall built across a river to hold back water and store it is known as a dam. It is useful as it stores water for future use.</p> <p>3. List any four uses of water? Four uses of water are: i. We need water for drinking. ii. We need water for cooking. iii. We need water for bathing. iv. We need water for putting out fire.</p> <p>4. Why should we not drink dirty water? We should not drink dirty water as it can make us ill.</p> <p>NOTE: Answer the following questions to be done in the EVS notebook. ACTIVITY: Stick pictures of any five sources of water.</p>																				
<p>HINDI</p>	<p>पाठ - चंद्रबिंदु की मात्रा (ँ)</p> <p>ॐ पाठ का दो बार सस्वर वाचन करें। (पृष्ठ संख्या ७०)</p> <p>ॐ निम्नलिखित शब्दों को दो-दो बार लिखें। (उत्तर पुस्तिका में)</p> <table border="0"> <tr> <td>चाँद</td> <td>बाँसुरी</td> </tr> <tr> <td>ऊँट</td> <td>अँगूठी</td> </tr> <tr> <td>पूँछ</td> <td>हँसना</td> </tr> <tr> <td>पाँव</td> <td>आँचल</td> </tr> <tr> <td>दाँत</td> <td>दवाइयाँ</td> </tr> <tr> <td>धुआँ</td> <td>कहानियाँ</td> </tr> </table> <p>ॐ चित्र पहचान कर उनके नाम लिखें। (उत्तर पुस्तिका में)</p> <p> - चाँद</p> <p> - पाँव</p> <p> - सूँड</p> <p> - अँगूठी</p> <p> - दाँत</p> <p>ॐ मात्रा लगाओ। (पुस्तक एवं उत्तर पुस्तिका में)</p> <table border="0"> <tr> <td>बूद - बूँद</td> <td>चादपुर - चाँदपुर</td> </tr> <tr> <td>पाच - पाँच</td> <td>घूट - घूँट</td> </tr> <tr> <td>गाव - गाँव</td> <td>धुआ - धुआँ</td> </tr> <tr> <td>पहुचा - पहुँचा</td> <td>बासुरी - बाँसुरी</td> </tr> </table>	चाँद	बाँसुरी	ऊँट	अँगूठी	पूँछ	हँसना	पाँव	आँचल	दाँत	दवाइयाँ	धुआँ	कहानियाँ	बूद - बूँद	चादपुर - चाँदपुर	पाच - पाँच	घूट - घूँट	गाव - गाँव	धुआ - धुआँ	पहुचा - पहुँचा	बासुरी - बाँसुरी
चाँद	बाँसुरी																				
ऊँट	अँगूठी																				
पूँछ	हँसना																				
पाँव	आँचल																				
दाँत	दवाइयाँ																				
धुआँ	कहानियाँ																				
बूद - बूँद	चादपुर - चाँदपुर																				
पाच - पाँच	घूट - घूँट																				
गाव - गाँव	धुआ - धुआँ																				
पहुचा - पहुँचा	बासुरी - बाँसुरी																				

एक दिए गए वाक्य को पाँच बार लिखें। (उत्तर पुस्तिका में)
ऊँट एक घूँट में सारा पानी पी गया।

ENGLISH


English Language

Ch- Prepositions

A. Circle the correct prepositions in these sentences.

1. The dog is _____ the table. (in/under)
2. The cat is sitting _____ the bench. (in/on)
3. Jam is _____ the bottle. (in/ under)
4. The flowers are _____ the vase. (under/ in)
5. The pen is _____ my pocket. (on/ in)
6. Rohan is _____ the pool. (under/in)
7. How much water is _____ the bottle?(in/on)
8. The mouse hid _____ the armchair. (on/under)

B. Draw and colour the given picture. Read the sentences given below and complete them with the correct preposition.



The ball is _____ the bed.

The bat is _____ the bed.

The clock is _____ the table.

The table is _____ the bed.

The picture is hanging _____ the table.

over
under
on
against
beside

C. Final term project work- Fun with homophones (refer pg. 110 English Access book)

Stick pictures showing homophones and write a sentence to explain it.

D. Comprehension- Pg. 92 Comprehension 3 (Grammar land book)

ENGLISH LITERATURE

CH.FINO THE FISH

Activity-Help Fino the little fish to find his way back home.(Pg No-93)

I.Word Bank

- | | |
|-------------|--------------|
| i. Fino | vi.shark |
| ii. Grandpa | vii.scared |
| iii. Timmy | viii.octopus |
| iv. turtle | ix.giant |

v. chase

x.Nora

II.Antonyms

i.grandpa x grandma

v.far x near

ii.little x big

iii.catch x throw

iv.big x small

III.Fill in the blanks:

i.Fino and his grandfather live in the sea.

ii.There are dangerous animals in the sea.

iii.Timmy and Fino swim away.

iv.Timmy and Fino are scared by a big shark.

v.Nora is a kind and helpful fish.

IV.True/False:

i.Fino lives with his grandmother. False

ii.Timmy and Fino go out to play. True

iii.Fino loves to play chess. False.

iv.The octopus is very small in size. False

v.Nora helps Timmy and Fino. True.

V.One word answer:

i. With whom did Fino lived?

Grandfather

ii. Who calls Fino out to play?

Timmy

iii. Which game does Fino likes to play?

Catch and Chase

iv. Who comes to save Fino and Nora from gaint octopus?

Nora

VI.Question/Answers:

i. Where do Fino and his grandfather live?

Fino and his grandfather lived in the sea.

ii. What does Grandfather say to Fino?

Grandfather said Fino that he is going to take rest, and told him not go far away from home.

iii. Where do Fino and Timmy go?

Timmy and Fino went far away from home.

iv. Which two dangerous animals do Fino and Timmy meet?

Fino and Timmy met shark and gaint octopus.

v. Who saves Fino and Timmy?

Nora saves Fino and Timmy .

vi. Fino learns two lessons in this story. What are they?

i. He should not go far from home alone.

ii. He should listen to his elders.

VII. Make Sentences.

- i. rest
- ii. dangerous
- iii. catch
- iv. kind
- v. elders

VIII. Jumbled Words

- i. noif-Fino
- ii. meho-home
- iii. wism-swim
- iv. dreasc-scared
- v. hcrea-reach

IX. Rhyming words

- i. far-car, bar
- ii. swim-trim, gym
- iii. shark-bark, dark
- iv. kind-mind, blind
- v. big-dig, fig

NOTE: The above exercises to be done in the English Literature Notebook.

Final term project- Draw and colour a magic land which you would like to visit.

**Project- My Magic Land
(Draw & Colour) Reference
pg no 118 (EA) Write 3
sentences describing it.
(Project to be done in Scrap
book.)**

**Dr. Rachana Nair
Director Academics**